




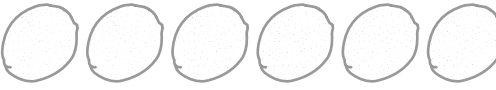


Name: _____ Class: _____



Complete each number sentence.

1 $8 - 2 = \underline{\quad}$  



$8 = 2 + \underline{\quad}$

2 $7 - 6 = \underline{\quad}$  

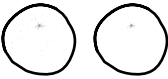
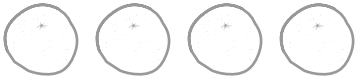
$7 = 6 + \underline{\quad}$

3 $10 - 1 = \underline{\quad}$  



$10 = 1 + \underline{\quad}$

4 $4 - 2 = \underline{\quad}$  

$4 = 2 + \underline{\quad}$

5 $6 - 4 = \underline{\quad}$  


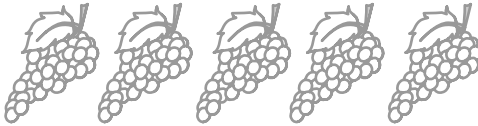
$6 = 4 + \underline{\quad}$

6 $3 - 2 = \underline{\quad}$  

$3 = 2 + \underline{\quad}$

7 $9 - 4 = \underline{\quad}$  

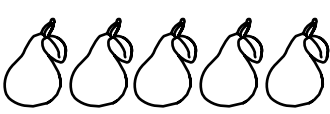

$9 = 4 + \underline{\quad}$

8 $6 - 5 = \underline{\quad}$  

$6 = 5 + \underline{\quad}$

9 $5 - 0 = \underline{\quad}$ 

$5 = 0 + \underline{\quad}$

10 $8 - 3 = \underline{\quad}$  

$8 = 3 + \underline{\quad}$

